




# Comics

# Addition and Subtraction

Project: Maths is Fine with Digital Style

Project number: 2021-1-CZ01-KA220-SCH-000027773

1 February 2022 – 31 August 2024



# The Candy Shop



On Monday Kate calls Owen.



They go to the candy shop and Kate orders the sweets she wants.



Now it is Owen's turn.



On Tuesday they go to the candy shop again and buy more sweets. They buy two cakes and two lollipops.




On Tuesday they eat some sweets. They eat the candy floss, two cakes and two lollipops.



On Wednesday, they go to the playground and eat some sweets: 4 cakes, 6 lollipops.



On the way home they eat 4 lollipops and 3 cakes.




The last day they are sick because they ate a lot of sweets!!




How many sweets did they have?

Create your own at Storyboard That

# Garden Party




The teacher welcomed all the students to the party.




Five people came to the party.




Two people left the party and went home.



Three more people joined the party.



One more teacher and the principal joined the garden party.



One mom came to pick up four kids and they went home.



More friends joined.




Finally four friends joined the party.



How many people played basketball at the party?

Create your own at [Storyboard That](https://www.storyboardthat.com/)

# Amazing Holidays



Once upon a time there was a family who went to a tropical island!!!



They found five dogs which were angry.



But look! They are very nice!



They went to the beach and they surfed with seven dolphins and ten fish.




In the mountains they saw three lamas.




While they were eating a fox watched them.



The children went up the tower. They watched three birds flying in the sky.



On the beach they saw six crabs.



How many animals did they see on the island?

Create your own at Storyboard That



# Playing Basketball



They are two teams.  
Team 1: Gustas, Saule, Svajone.  
Team 2: Pijus, Agne, Irada



Saule missed one shot and scored two.  
Agne missed two shots and scored one.



Svajone scored three and missed one.  
Irada missed all 3 shots.



Gustas scored all three shots.  
Pijus scored two shots and missed one.



Agne scored all three shots.  
Saule scored two and missed one shot.



Svajone missed one and scored two shots.  
Irada scored all three shots.



Gustas scored one and missed two shots.  
Pijus scored two shots and missed one.




Svajone scored all three shots.  
Irada scored all three shots.



Which team won?  
Who scored the most points?

Create your own at Storyboard That

## On the Playground



4 kids and 2 moms are on the playground.



1 mom and 1 kid are going to get the ice-cream.



10 boys come to the playground to play basketball.



The other mum with the three children are going to eat ice-cream, too.



Mark calls to his brother.



George calls to his five friends.



Joe has two brothers and he calls them.



Let's wait now.



One brother and three friends came. How many people are on the playground?

Create your own at Storyboard That

# Cooking Story



A chef cooked 20 dumplings.



Two customers came. One ate two dumpling and the other ate three.



Another two customers came. One of them ate two dumplings and the other ate four.



A woman came and ate two dumplings.



a man and a woman came and ate two dumplings each.




The chef cooked ten more dumplings.



A sumo came and ate four dumplings.



A mom, a dad and a daughter came and each ate two dumplings.




How many dumplings were left on the plate?

Create your own at Storyboard That



Vocabulary



Create your own at Storyboard That



This book was created as part of a collaboration on the Erasmus+ project:  
Project:

**Maths is Fine with Digital Style**

Project number: 2021-1-CZ01-KA220-SCH-000027773



---

## Schools involved:

Czech Republic, Základní škola a Mateřská škola Klíč s.r.o., Klášterní 2490, Česká Lípa

Sweden, Nättrabyskolan, Fredriksdalsvägen 37, 37330 Nättraby

Spain, CEIP Anselmo Pérez de Brito, C/ Carretera El Galión s/n, 38700, Santa Cruz de la Palma, Provincia Tenerife, Canary Islands

Slovenia, Osnovna šola Franceta Bevka Tolmin, Dijaška ulica 12b, 5220 Tolmin

Lithuania, Vilkaviskio pradinė mokykla, Vienybės g. 50, 70104 Vilkaviskis

Greece, 9° DIMOTIKO SXOLEIO ALEXANDROUPOLIS, Rodou 36, Alexandroupolis

---

## Acknowledgements

We would like to thank all the teachers who have contributed their support and patience to complete this book.

We would like to thank all the pupils who have contributed their skills to create this book.

Made in EU  
February 2022 – August 2024



**Funded by  
the European Union**

*The European Commission's support for the production of this publication does not constitute an endorsement of the contents, which reflect the views only of the authors, and the Commission cannot be held responsible for any use which may be made of the information contained therein.*